
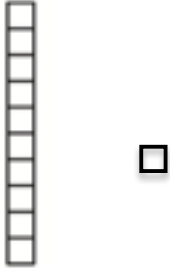


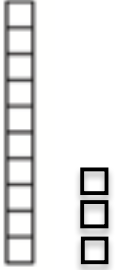

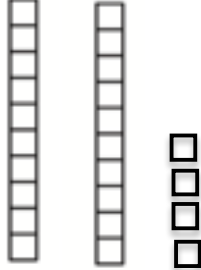
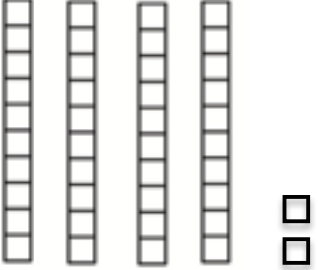
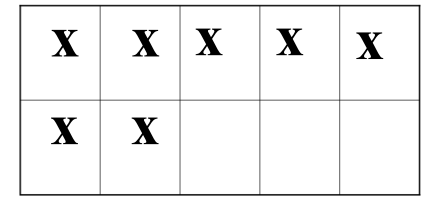
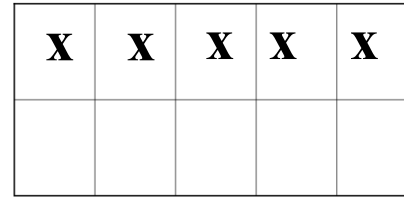
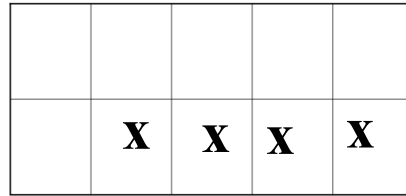
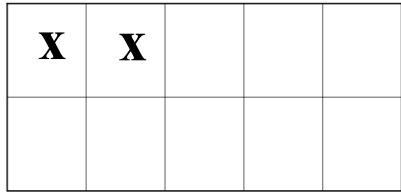


<b>2</b>	<b>3</b>	<b>4</b>	<b>5</b>
□ □	□ □ □	□ □ □ □	□ □ □ □ □
□ □	□ □ □	□ □ □ □	□ □ □ □ □
□ □	□ □ □	□ □ □ □	□ □ □ □ □
<b>TWO</b>	<b>THREE</b>	<b>FOUR</b>	<b>FIVE</b>

<b>10</b>	<b>11</b>	<b>12</b>	<b>14</b>
$10 + 0$	$10 + 1$	$10 + 2$	$10 + 4$
			
ten	eleven	twelve	fourteen
1 more than 13	1 less than 13	1 more than 9	1 more than 10

<b>13</b>	<b>15</b>	<b>24</b>	<b>42</b>
$10 + 3$	$10 + 5$	$20 + 4$	$40 + 2$
			
thirteen	fifteen	twenty-four	forty-two
1 more than 12	1 less than 16	1 more than 23	1 less than 43



$$2 + \square = 10$$

$$\square + 4 = 10$$

$$5 + \square = 10$$

$$7 + \square = 10$$

**8 empty squares**

**6 empty squares**

**5 empty squares**

**3 empty squares**

Two ducks in pond.  
Some more came.  
Now there are 10.  
How many came?

I had pennies.  
Mom gave me 4.  
Now I have 10.  
How many did I  
have before?

There are 10 kids in  
class. 5 are here.  
How many not here?

Today is the 7<sup>th</sup>.  
How many days  
until the 10<sup>th</sup>?

<table border="1"><tr><td></td><td></td><td></td><td></td><td></td></tr><tr><td></td><td></td><td></td><td></td><td></td></tr></table>											<table border="1"><tr><td></td><td></td><td></td><td></td><td></td></tr><tr><td></td><td></td><td></td><td></td><td></td></tr></table>											<table border="1"><tr><td></td><td></td><td></td><td></td><td></td></tr><tr><td></td><td></td><td></td><td></td><td></td></tr></table>											<table border="1"><tr><td></td><td></td><td></td><td></td><td></td></tr><tr><td></td><td></td><td></td><td></td><td></td></tr></table>										

<b>24</b>			
<b><math>10 + 10 + 4</math></b>			
<b>2 tens + 4 ones</b>			
<b>86 not circled</b>			
